

1. 영상을 보며 7단 곱셈을 외워 봅시다.

※ 열심히 연습했으면 ○ 표하세요.

함께하기	스스로 하기	나의 카드로 구구단

2. 덧셈 문제를 풀어보세요. (곱셈을 더 잘하게 해주는 덧셈문제)

$7 + 7 = \square$

$56 + 7 = \square$

$14 + 7 = \square$

$63 + 7 = \square$

$21 + 7 = \square$

$35 + 7 = \square$

$28 + 7 = \square$

$35 + 14 = \square$

$35 + 7 = \square$

$35 + 21 = \square$

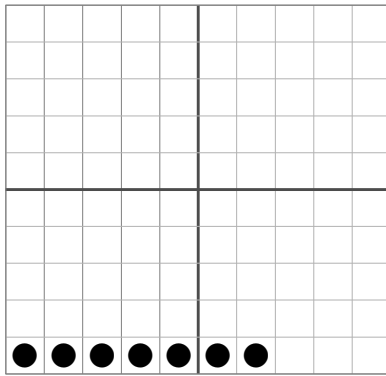
$42 + 7 = \square$

$35 + 28 = \square$

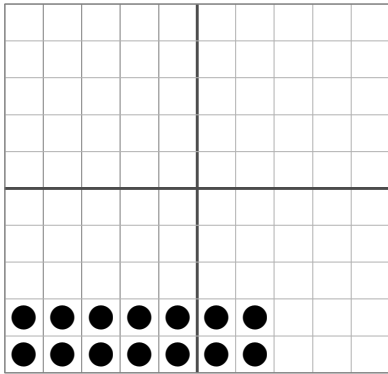
$49 + 7 = \square$

$35 + 35 = \square$

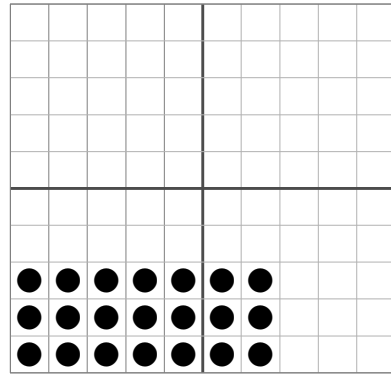
3. 아래와 같이 그림을 보고 곱셈식을 완성하세요.



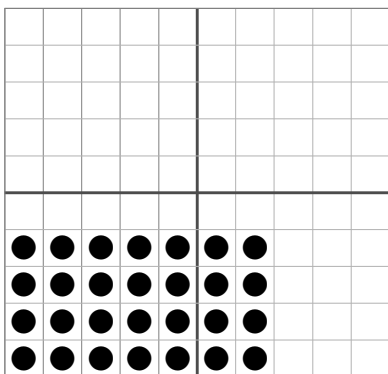
$$\boxed{7} \times \boxed{1} = \boxed{7}$$



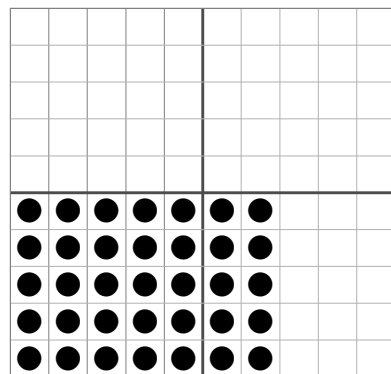
$$\boxed{7} \times \boxed{\quad} = \boxed{\quad}$$



$$\boxed{7} \times \boxed{\quad} = \boxed{\quad}$$

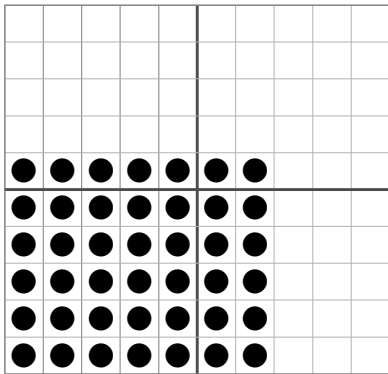


$$\boxed{\quad} \times \boxed{\quad} = \boxed{\quad}$$

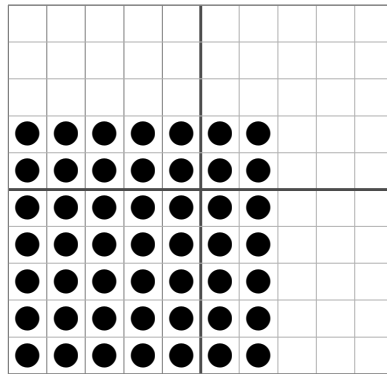


$$\boxed{\quad} \times \boxed{\quad} = \boxed{\quad}$$

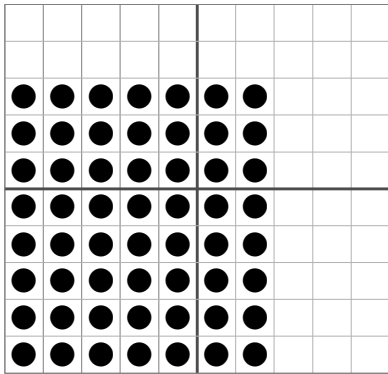
4. 아래와 같이 그림을 보고 곱셈식을 완성하세요.



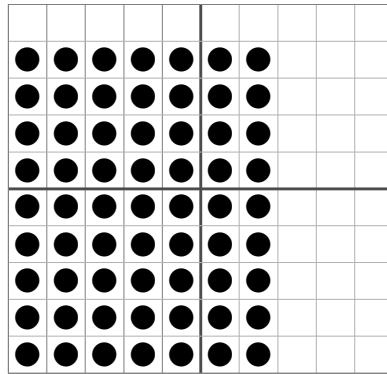
$$\boxed{7} \times \boxed{} = \boxed{}$$



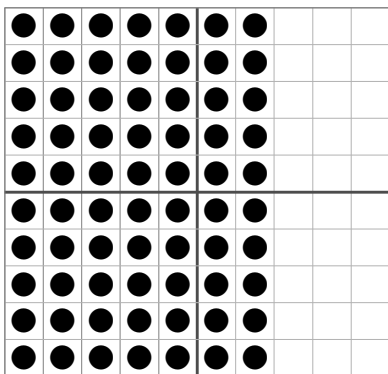
$$\boxed{} \times \boxed{} = \boxed{}$$



$$\boxed{} \times \boxed{} = \boxed{}$$



$$\boxed{} \times \boxed{} = \boxed{}$$




$$\boxed{} \times \boxed{} = \boxed{}$$

5. 아래와 같이 그림을 보고 곱셈식을 완성하세요.




$$\boxed{7} \times \boxed{1} = \boxed{7}$$



$$\boxed{7} \times \boxed{} = \boxed{}$$




$$\boxed{7} \times \boxed{} = \boxed{}$$




$$\boxed{} \times \boxed{} = \boxed{}$$




$$\boxed{} \times \boxed{} = \boxed{}$$




$$\boxed{} \times \boxed{} = \boxed{}$$




$$\boxed{} \times \boxed{} = \boxed{}$$



$$\boxed{} \times \boxed{} = \boxed{}$$



$$\boxed{} \times \boxed{} = \boxed{}$$



$$\boxed{} \times \boxed{} = \boxed{}$$

7단 곱셈은 ()씩 커지고 있어요!

6. 7부터 7씩 뛰어선 수에 ○표시 하고, 빈칸에 알맞은 답을 쓰세요.

1	2	3	4	5	6	7	8	9	10
11	12	13	14	15	16	17	18	19	20
21	22	23	24	25	26	27	28	29	30
31	32	33	34	35	36	37	38	39	40
41	42	43	44	45	46	47	48	49	50
51	52	53	54	55	56	57	58	59	60
61	62	63	64	65	66	67	68	69	70

$7 \times 1 =$	<input type="text"/>	$7 \times 2 =$	<input type="text"/>	$7 \times 3 =$	<input type="text"/>
$7 \times 4 =$	<input type="text"/>	$7 \times 5 =$	<input type="text"/>	$7 \times 6 =$	<input type="text"/>
$7 \times 7 =$	<input type="text"/>	$7 \times 8 =$	<input type="text"/>	$7 \times 9 =$	<input type="text"/>
$7 \times 10 =$	<input type="text"/>				

7. 알맞은 곱셈식과 답을 연결하세요.

- | | | |
|---------------|---|------|
| 7×1 | • | 35 |
| 7×2 | • | 21 |
| 7×3 | • | 42 |
| 7×4 | • | 14 |
| 7×5 | • | 28 |
| 7×6 | • | 49 |
| 7×7 | • | 7 |
| 7×8 | • | 63 |
| 7×9 | • | 56 |
| 7×10 | • | 70 |

8. 뛰어세기를 하며 곱셈을 해보세요.

